



# Handlungen wiederholen

1



$3 \cdot \underline{\quad} = \underline{\quad}$

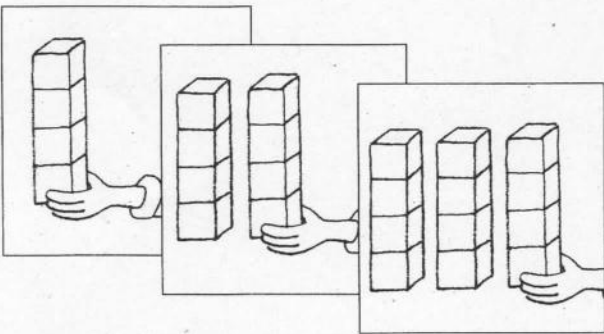
$\underline{2} + \underline{\quad} + \underline{\quad} = \underline{\quad}$



$4 \cdot \underline{\quad} = \underline{\quad}$

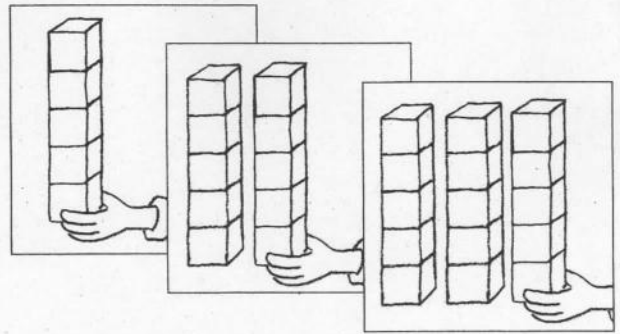
$\underline{\quad} + \underline{\quad} + \underline{\quad} + \underline{\quad} = \underline{\quad}$

2



$3 \cdot \underline{\quad} = \underline{\quad}$

$\underline{4} + \underline{\quad} + \underline{\quad} = \underline{\quad}$



$3 \cdot \underline{\quad} = \underline{\quad}$

$\underline{\quad} + \underline{\quad} + \underline{\quad} = \underline{\quad}$

3



$3 \cdot 6 = \underline{\quad}$

$2 \cdot 3 = \underline{\quad}$

$\underline{6} + \underline{\quad} + \underline{\quad} = \underline{\quad}$

$\underline{\quad} + \underline{\quad} = \underline{\quad}$

$6 \cdot 2 = \underline{\quad}$


$2 \cdot 4 = \underline{\quad}$

$\underline{\quad} + \underline{\quad} + \underline{\quad} + \underline{\quad} + \underline{\quad} + \underline{\quad} = \underline{\quad}$

$\underline{\quad} + \underline{\quad} = \underline{\quad}$


# Mal- und Plusaufgaben

1



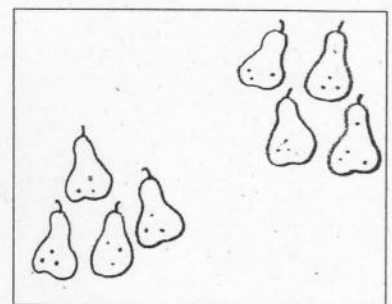
$$\underline{2 + 2 + 2 = 6}$$

$$\underline{3 \cdot 2 = \quad}$$



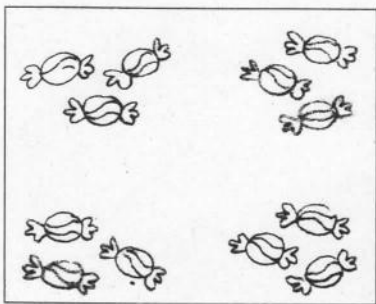
$$\underline{\quad + \quad + \quad = \quad}$$

$$\underline{\quad \cdot \quad = \quad}$$




$$\underline{\quad + \quad + \quad = \quad}$$

$$\underline{\quad \cdot \quad = \quad}$$



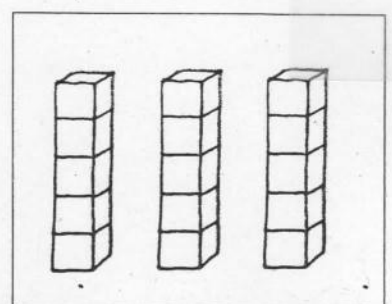
$$\underline{\quad + \quad + \quad = \quad}$$

$$\underline{\quad \cdot \quad = \quad}$$



$$\underline{\quad + \quad + \quad = \quad}$$


$$\underline{\quad \cdot \quad = \quad}$$



$$\underline{\quad + \quad + \quad = \quad}$$

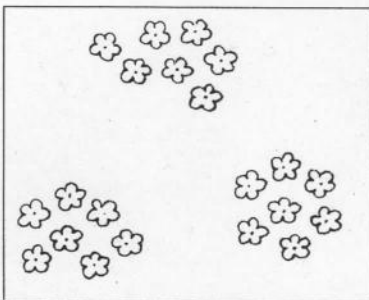
$$\underline{\quad \cdot \quad = \quad}$$

2



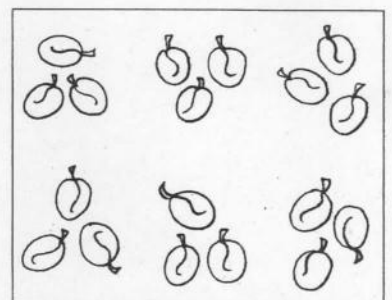
$$\underline{6 + 6 = \quad}$$

$$\underline{2 \cdot 6 = \quad}$$




$$\underline{\quad + \quad + \quad = \quad}$$

$$\underline{\quad \cdot \quad = \quad}$$



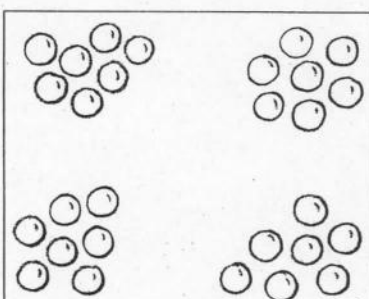
$$\underline{\quad + \quad + \quad = \quad}$$

$$\underline{\quad \cdot \quad = \quad}$$




$$\underline{\quad + \quad + \quad = \quad}$$

$$\underline{\quad \cdot \quad = \quad}$$



$$\underline{\quad + \quad + \quad = \quad}$$

$$\underline{\quad \cdot \quad = \quad}$$



$$\underline{\quad + \quad + \quad = \quad}$$

$$\underline{\quad \cdot \quad = \quad}$$